

Name _____ Date _____ Period _____

Formulas: **Volume = length * width * height**

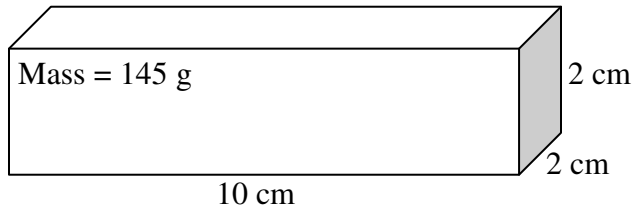
Density = $\frac{\text{Mass}}{\text{Volume}}$

For each of the following, calculate the volume and density using the provided measurements.

Be sure to check your units!

Round all calculations to the nearest tenth!

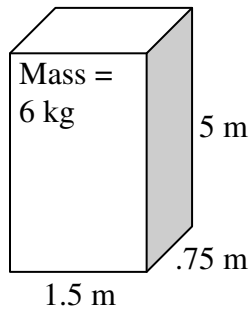
1)



Volume = _____

Density = _____

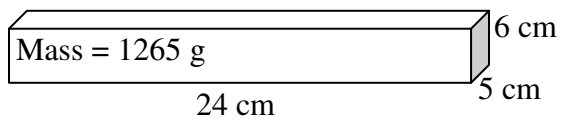
2)



Volume = _____

Density = _____

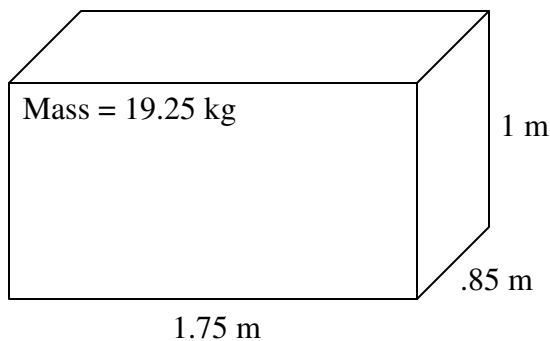
3)



Volume = _____

Density = _____

4)



Volume = _____

Density = _____